

Year 2



Home/School Learning Pack



This booklet contains work the children have covered in the classroom. They will be familiar with the skills needed to complete the maths tasks. The English work has also been chosen to build upon skills we are learning in English this term.


At the back of the booklet you will find English and maths resources and key words which will help support the children's learning

Year 1 Maths Activity Mat: Autumn 1

①

Section 1

How many strawberries are here?



Section 4


$7-1=$

$5-1=$

$2-1=$


Section 6

Put the missing numbers on the number line.




Section 7

Tessa has 6 pens. She loses 1 pen.
How many pens does she have left?



Section 5

Write a number statement for the picture.



+

=

Section 3

Write the numbers in the box.

three

nine

one


Section 8

What's next? Write 3 more numbers in this sequence.



Section 1

How many carrots are here?



Section 4

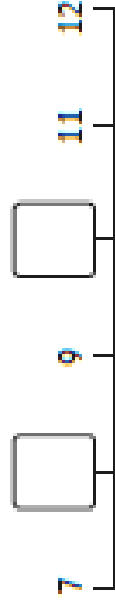
$10-1=$

$9-1=$

$13-1=$

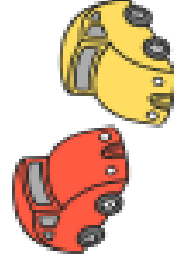
Section 6

Put the missing numbers on the number line.




Section 7

Amir has 9 toy cars. He loses 1 car.
How many cars does he have left?



Section 5

Write a number statement for the picture.



+

=

Section 3

Write the numbers in the box.

twelve

eight

seventeen

Section 2

Write the number that is one more.

12 →

16 →

19 →

Section 8

What's next? Write 3 more numbers in this sequence.



Section 1

Milly has 8 biscuits.

She shares them equally with her friend.

How many biscuits do they each have?



Section 4

Complete the pattern.

0 5 10 15 — — —

Section 6

Draw a hat on top of the teddy.



Section 7

Today is Friday.

Circle what day it was **yesterday**.

Thursday Friday Saturday

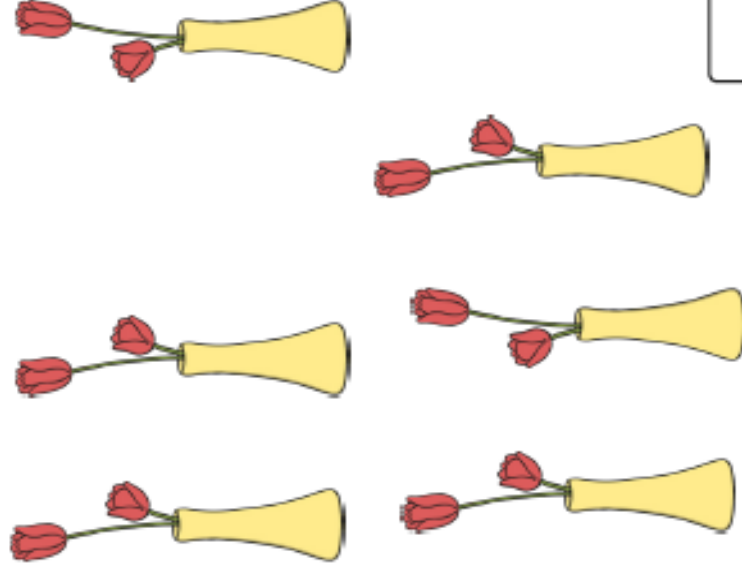
Section 3

Use a ruler to draw a line that is 6cm long.



Section 5

How many flowers are there altogether?



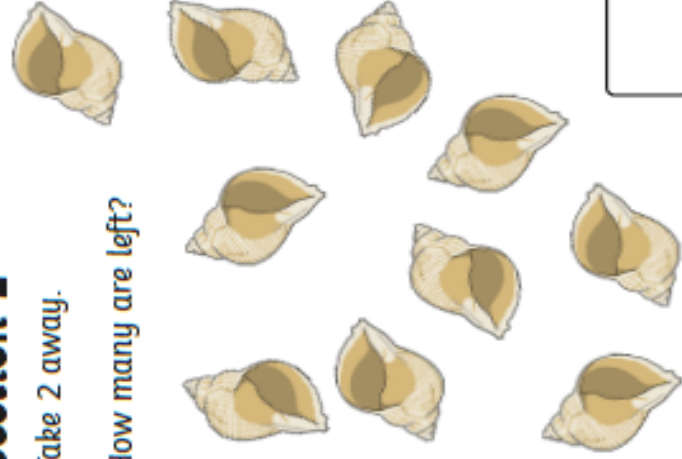
Section 8

I have 4 pairs of socks. How many socks do I have altogether?

Section 1

Take 2 away.

How many are left?



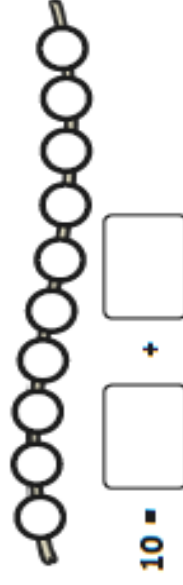
Section 3

Tick the ladybird with the most spots.



Section 4

Use one colour to colour some of the beads.
Write a number statement to match.



Section 6

Draw the correct number of chocolate chips on the biscuit.



Section 7

How much money is here?



Section 5

Write the 2 missing numbers on the flags.



Section 2

Use a ruler to draw a triangle.

Section 8

Eva has:

2 dogs

1 cat

4 fish

How many pets does she have?

0 1 2 3 4 5 6 7 8 9 10

1 1 2 3 4 5 6 7 8 9 20

0 1 2 3 4 5 6 7 8 9 10

1 1 2 3 4 5 6 7 8 9 20

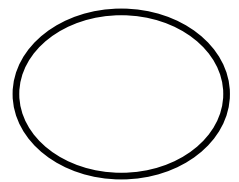
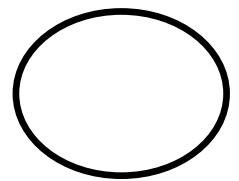
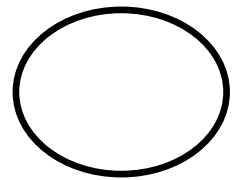
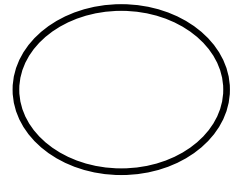
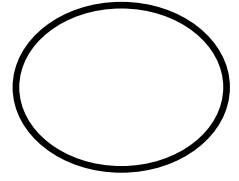
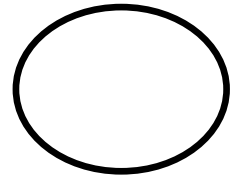
1	2	3	4	5	6	7	8	9	10
11	12	13	14	15	16	17	18	19	20
21	22	23	24	25	26	27	28	29	30
31	32	33	34	35	36	37	38	39	40
41	42	43	44	45	46	47	48	49	50
51	52	53	54	55	56	57	58	59	60
61	62	63	64	65	66	67	68	69	70
71	72	73	74	75	76	77	78	79	80
81	82	83	84	85	86	87	88	89	90
91	92	93	94	95	96	97	98	99	100

Can you colour in 1 more than?: 5 7 10 13 25 27
30 34 38 41 55

Can you colour in 1 less than?: 2 12 18 22 33
40 41 60 100

Have a go at saying your numbers from 1-100

Can you measure the lines and record the length in the circle?



Can you solve these addition sentences?

$4 + 2 = \square$

$6 + 2 = \square$

$4 + 4 = \square$

$5 + 3 = \square$

$7 + 1 = \square$

$8 + 2 = \square$

$4 + 4 = \square$

$5 + 4 = \square$

$6 + 3 = \square$

$7 + 3 = \square$

$7 + 4 = \square$

$8 + 8 = \square$

I Spy and Read

Draw a line to the matching picture when you have read each word.

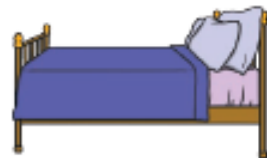
hop



bell



bus



kiss



doll



fan

bug



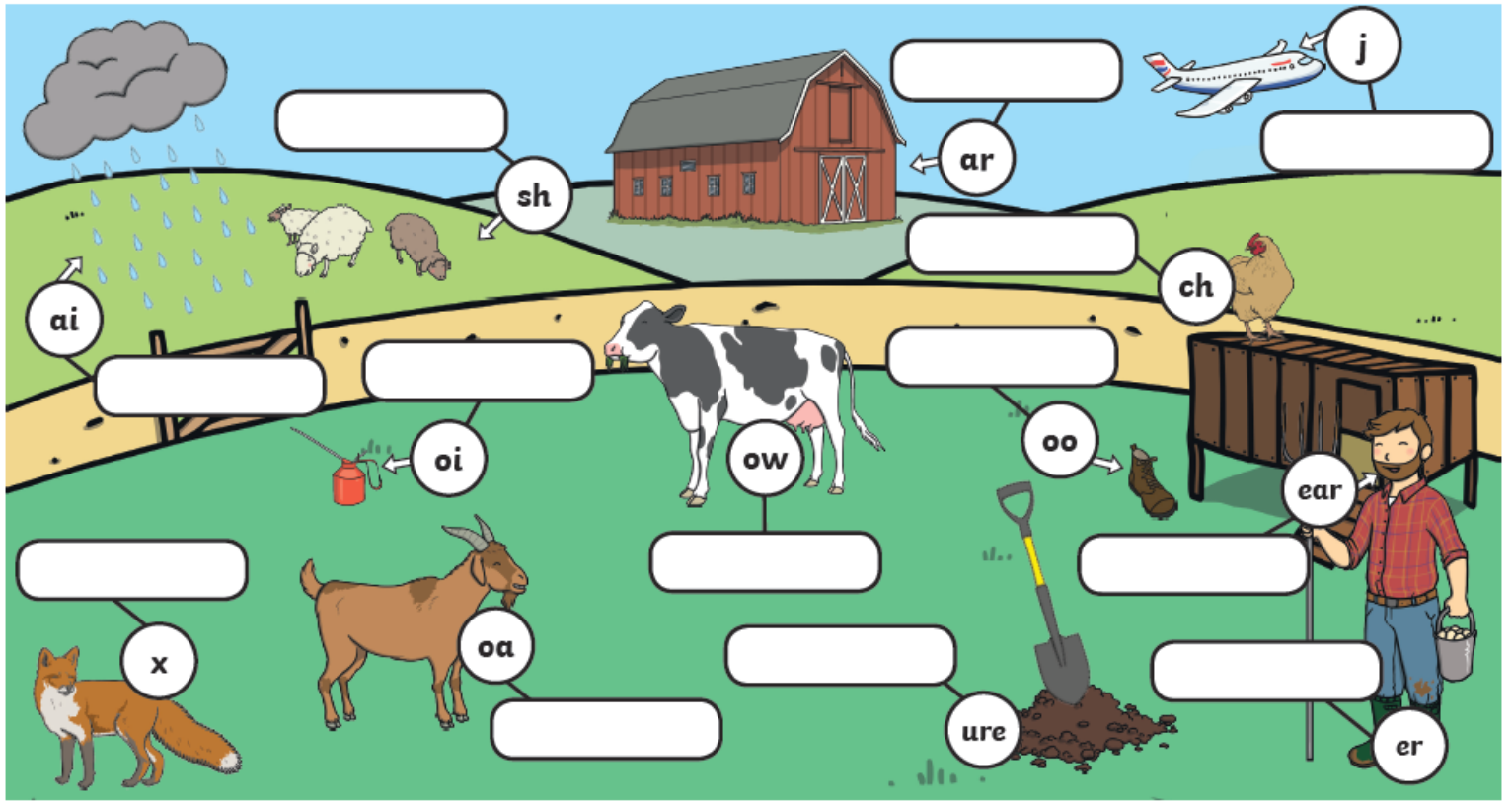
back




Challenge: Can you spell a word to match one of the other pictures?

Phase 3 Phonics Picture Activity

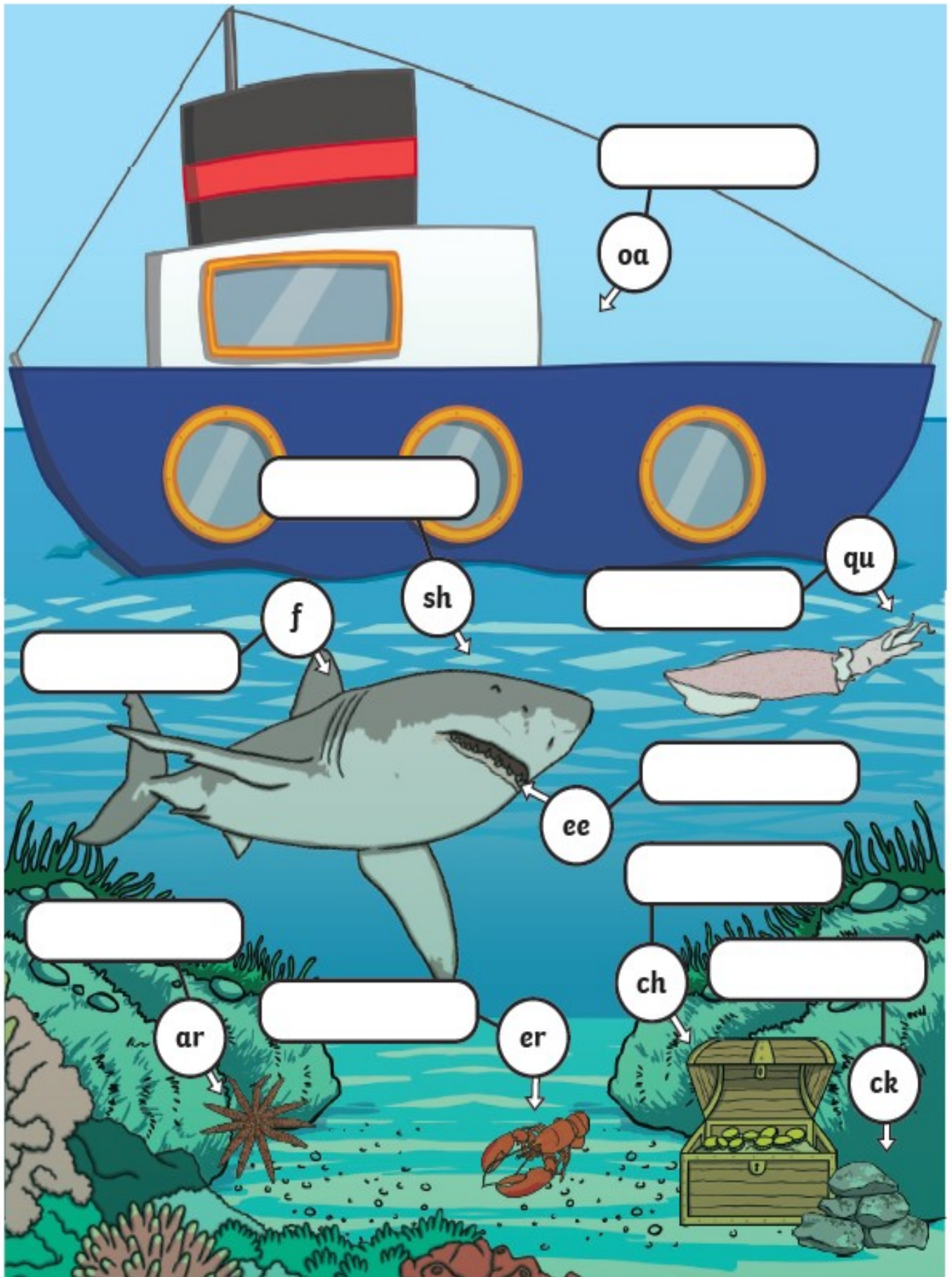
Fill in the missing sounds.



Fill in the missing sounds.



Fill in the missing sounds.



Phase 3 Phonics

h o j j h j a m t k i f
b z l j o i n r v z q e
l h w u j j c j w f l e
v c a w g x u i a e g l
a k i o v c r i x a f t
p h t u u g e v e r n z
s z m c q n y q p c v f
s v o o t x b r y a z k
o c q o u v s u s s z f
n v c k r b s f r h g m
g i m a n s h o c k r d
z s r w e q e y e o i m

fear

cash

shock

cook

jam

song

turn

join





feel

wait

cure


wax


Write a diary entry in the character of Traction Man


			 <small>finger spaces</small>	
Me				
Adult				











Try your singing skills with this song! Perform it for your family!

There was a Toy called Traction Man

(To the tune of there was a princess long ago)



There was a toy called Traction Man, Traction man, Traction Man,
there was a toy called Traction Man, long long ago.

He had a pet called Scrubbing Brush, Scrubbing Brush, Scrubbing Brush
He had a pet called Scrubbing Brush, long long ago.



The Poisonous Dishcloth came along came along, came along
The Poisonous Dishcloth came along, long, long ago.

Scrubbing Brush saved the day, saved the day, saved the day
Scrubbing Brush saved the day, long, long ago.

He didn't like his Romper Suit, Romper Suit, Romper Suit
He didn't like his Romper Suit, long long ago.



They had a very busy day, busy day, busy day
They had a very busy day, long long ago.

Create a new outfit and Setting for Traction Man


Setting: _____






Traction man is in the _____ wearing



Can you make a comic strip showing how trees become paper? The first bit has been done for you.



To make paper a tree needs to be chopped down.





Who uses this cooker?

Which materials is this cooker made from?

Why were these materials chosen?



Who uses this cooker?

Which materials is this cooker made from?

Why were these materials chosen?



Who uses this cooker?

Which materials is this cooker made from?

Why were these materials chosen?

Can you draw a map of your bedroom?

