

Year 1



Home/School Learning Pack



This booklet contains work the children have covered in the classroom. They will be familiar with the skills needed to complete the maths tasks. The English work has also been chosen to build upon the children's writing abilities.


At the back of the booklet you will find English and maths resources and key words which will help support the children's learning

# Year 1 Maths Activity Mat: Autumn 1

①

## Section 1

How many strawberries are here?



## Section 4

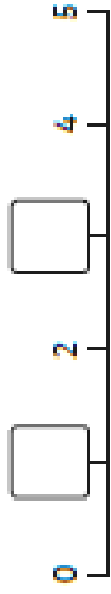
$7-1=$

$5-1=$

$2-1=$


## Section 6

Put the missing numbers on the number line.




## Section 7

Tessa has 6 pens. She loses 1 pen.  
How many pens does she have left?



## Section 5

Write a number statement for the picture.



+

=

## Section 2

Write the number that is one more.

$4 \rightarrow$

$6 \rightarrow$

$10 \rightarrow$

## Section 3

Write the numbers in the box.

three  nine  one

## Section 8

What's next? Write 3 more numbers in this sequence.




# Year 1 Maths Activity Mat: Autumn 1

①

## Section 1

How many carrots are here?



## Section 4


$10-1=$

$9-1=$

$13-1=$

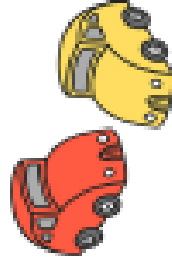
## Section 6

Put the missing numbers on the number line.




## Section 7

Amir has 9 toy cars. He loses 1 car.  
How many cars does he have left?



## Section 5

Write a number statement for the picture.



+

=

## Section 2

Write the number that is one more.

12 →

16 →

19 →

## Section 3

Write the numbers in the box.

twelve

eight

seventeen

## Section 8

What's next? Write 3 more numbers in this sequence.



## Section 1

Milly has 8 biscuits.

She shares them equally with her friend.

How many biscuits do they each have?



## Section 4

Complete the pattern.

0   5   10   15   —   —   —

## Section 6

Draw a hat on top of the teddy.



## Section 2

How many sides does a triangle have? Write the answer on the correct shape.

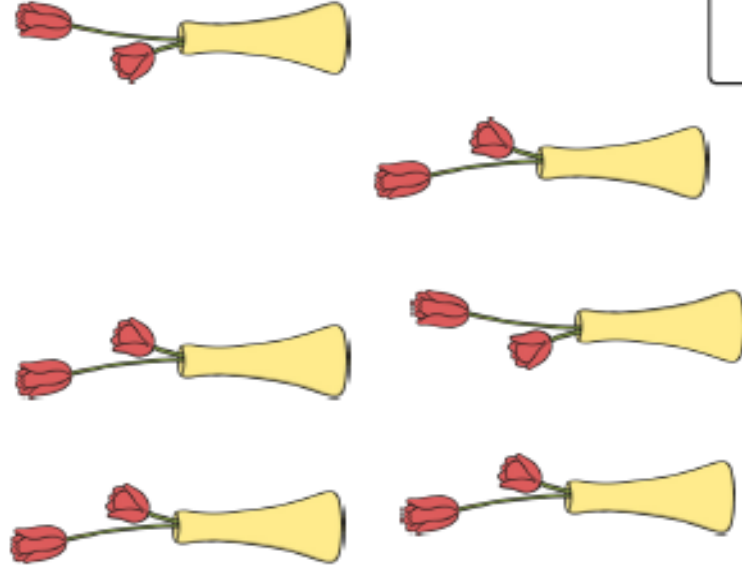


## Section 3

Use a ruler to draw a line that is 6cm long.

## Section 5

How many flowers are there altogether?



## Section 7

Today is Friday.

Circle what day it was **yesterday**.

Thursday   Friday   Saturday

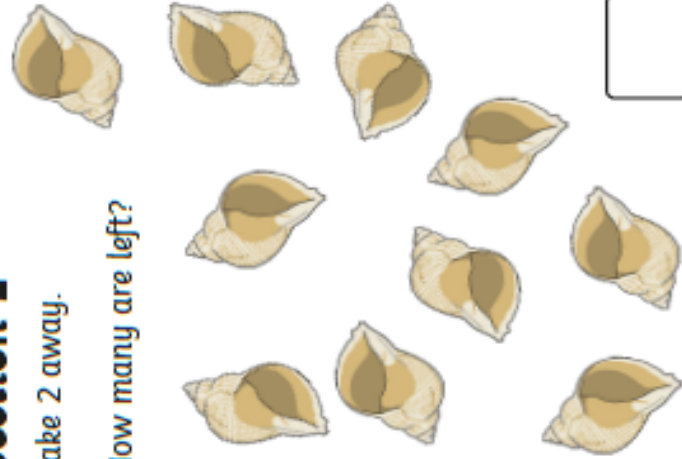
## Section 8

I have 4 pairs of socks. How many socks do I have altogether?

## Section 1

Take 2 away.

How many are left?




## Section 3

Tick the ladybird with the most spots.



## Section 4

Use one colour to colour some of the beads.  
Write a number statement to match.



$$10 - \square + \square$$

## Section 6

Draw the correct number of chocolate chips on the biscuit.



12

## Section 7

How much money is here?




## Section 2

Use a ruler to draw a triangle.

## Section 5

Write the 2 missing numbers on the flags.



## Section 8

Eva has:

2 dogs

1 cat

4 fish

How many pets does she have?

0 1 2 3 4 5 6 7 8 9 10

1 1 2 3 4 5 6 7 8 9 20

0 1 2 3 4 5 6 7 8 9 10

1 1 2 3 4 5 6 7 8 9 20

<b>1</b>	<b>2</b>	<b>3</b>	<b>4</b>	<b>5</b>	<b>6</b>	<b>7</b>	<b>8</b>	<b>9</b>	<b>10</b>
<b>11</b>	<b>12</b>	<b>13</b>	<b>14</b>	<b>15</b>	<b>16</b>	<b>17</b>	<b>18</b>	<b>19</b>	<b>20</b>
<b>21</b>	<b>22</b>	<b>23</b>	<b>24</b>	<b>25</b>	<b>26</b>	<b>27</b>	<b>28</b>	<b>29</b>	<b>30</b>
<b>31</b>	<b>32</b>	<b>33</b>	<b>34</b>	<b>35</b>	<b>36</b>	<b>37</b>	<b>38</b>	<b>39</b>	<b>40</b>
<b>41</b>	<b>42</b>	<b>43</b>	<b>44</b>	<b>45</b>	<b>46</b>	<b>47</b>	<b>48</b>	<b>49</b>	<b>50</b>
<b>51</b>	<b>52</b>	<b>53</b>	<b>54</b>	<b>55</b>	<b>56</b>	<b>57</b>	<b>58</b>	<b>59</b>	<b>60</b>
<b>61</b>	<b>62</b>	<b>63</b>	<b>64</b>	<b>65</b>	<b>66</b>	<b>67</b>	<b>68</b>	<b>69</b>	<b>70</b>
<b>71</b>	<b>72</b>	<b>73</b>	<b>74</b>	<b>75</b>	<b>76</b>	<b>77</b>	<b>78</b>	<b>79</b>	<b>80</b>
<b>81</b>	<b>82</b>	<b>83</b>	<b>84</b>	<b>85</b>	<b>86</b>	<b>87</b>	<b>88</b>	<b>89</b>	<b>90</b>
<b>91</b>	<b>92</b>	<b>93</b>	<b>94</b>	<b>95</b>	<b>96</b>	<b>97</b>	<b>98</b>	<b>99</b>	<b>100</b>

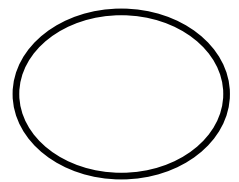
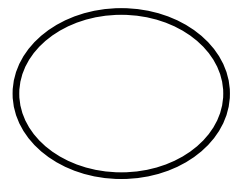
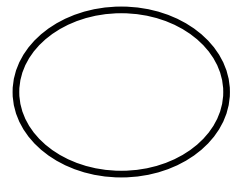
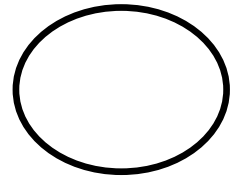
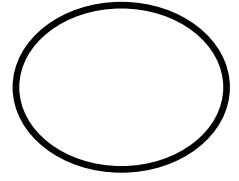
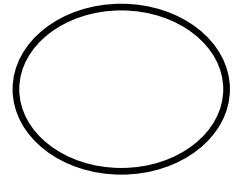
Can you colour in 1 more than?: 5 7 10 13 25 27  
30 34 38 41 55

Can you colour in 1 less than?: 2 12 18 22 33  
40 41 60 100

Have a go at saying your numbers from 1-100



Can you measure the lines and record the length in the circle?



Can you solve these addition sentences?

$4 + 2 = \square$

$6 + 2 = \square$

$4 + 4 = \square$

$5 + 3 = \square$

$7 + 1 = \square$

$8 + 2 = \square$

$4 + 4 = \square$

$5 + 4 = \square$

$6 + 3 = \square$

$7 + 3 = \square$

$7 + 4 = \square$

$8 + 8 = \square$

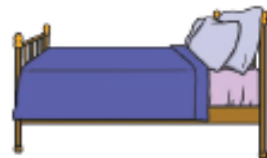
# I Spy and Read

Draw a line to the matching picture when you have read each word.

hop



bell



SSSSS



kiss



bug



bus

doll

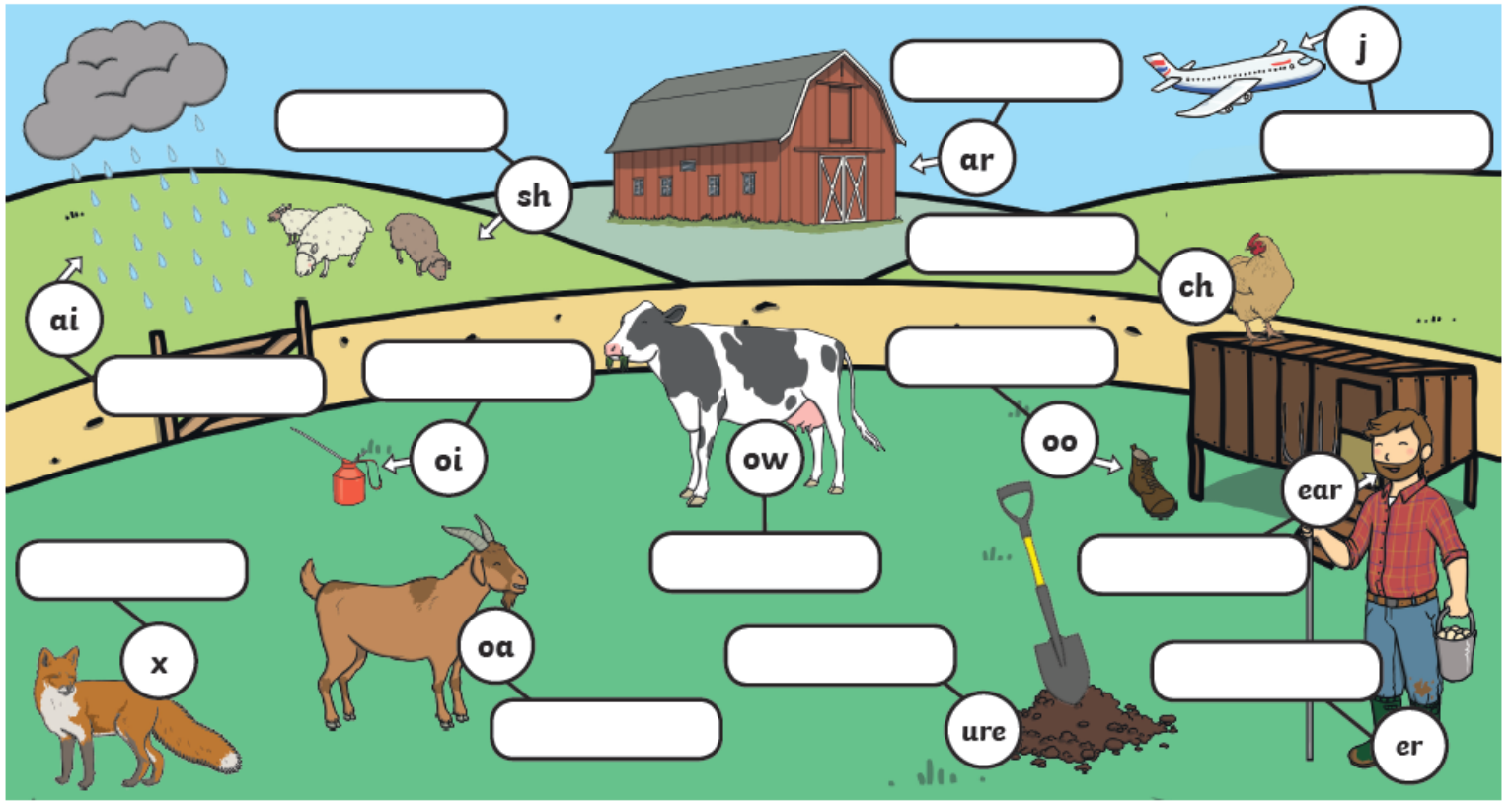
fan

back


**Challenge:** Can you spell a word to match one of the other pictures?

# Phase 3 Phonics Picture Activity

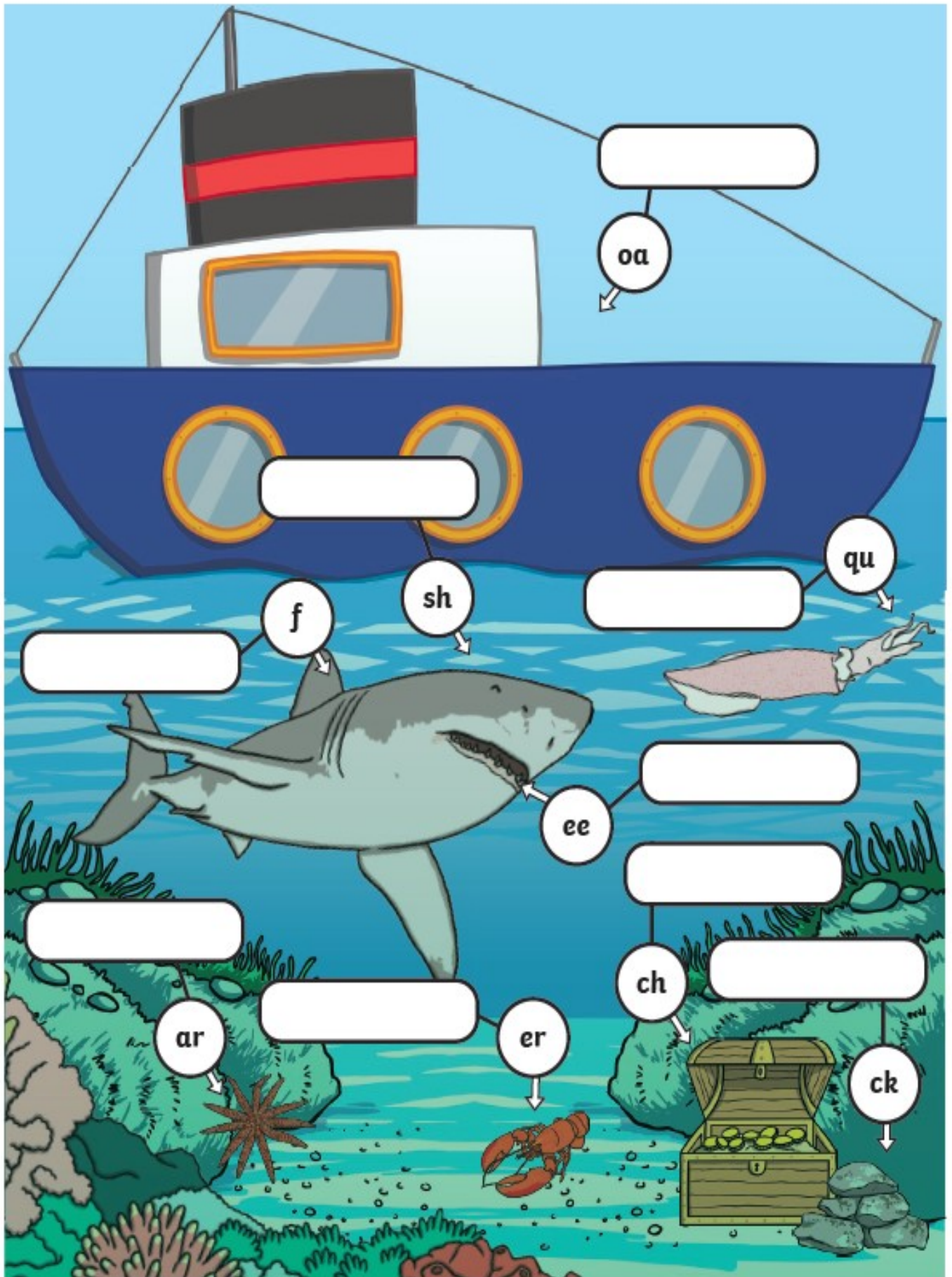
Fill in the missing sounds.



Fill in the missing sounds.



Fill in the missing sounds.



# Phase 3 Phonics

h o j j h j a m t k i f  
b z l j o i n r v z q e  
l h w u j j c j w f l e  
v c a w g x u i a e g l  
a k i o v c r i x a f t  
p h t u u g e v e r n z  
s z m c q n y q p c v f  
s v o o t x b r y a z k  
o c q o u v s u s s z f  
n v c k r b s f r h g m  
g i m a n s h o c k r d  
z s r w e q e y e o i m

fear

cash

shock

cook

jam

song

turn

join

feel

wait

cure

wax

# Room on the Broom

## Book Review



What is the setting?

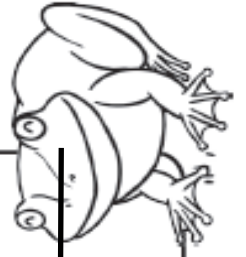

Who is the main character?








What happens first?


What happens next?


What happens last?

Can you have a go at retelling the story of 'Room on the Broom'?



twinkl.com













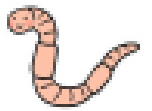










twinkl



Draw a picture of your favourite character from 'Superworm' and write some sentences to describe this character.



---


---

---


---

---

Can you label the parts of the body?



Can you draw a map of your bedroom?



# Witch and Animals Word Mat



witch



roar



frog



bird



cat



broomstick



bog



wind



beast



cauldron



dog



bow



plait



hat



wand



room



dragon

## My Body



shoulder



ear



lips



skin



heart



freckles



hand



finger



nose



bones



face



hips



eyes



toes



mouth



back



legs



tongue



foot



hair



arm



**Superworm word mat**



**crow**

**Superworm**

**skipping rope**

**kidnapped**

**honey**

**lizard**

**lasso**

**honey**

**spell**

**wizard**