

Resource Booklet 6.7.20



Year 3

Name: _____

Times Table Practise

Tick the box every time you practice each times table.

X2	X3	X4	X5	X8	X10

What is a Prefix?

5a. Which sentence cannot have the word 'unlucky' added to it?

- A. Some people think that thirteen is an _____ number.
- B. The children were excited about the _____ of the winner.
- C. The people who had their flight delayed were _____.



VF

6a. Tick the box below to show which word should include the prefix 'un'.

Ben was able to move his broken leg

 without help.



VF

7a. Circle the word which cannot be changed with the prefix 'un'.

- noticed
- avoid
- locate



VF

8a. Add the prefix 'un' to the words below and choose one to complete the sentence.

The house was filled with spirits and was said to be in an _____ location.

aided

loved

usual



VF

What is a Prefix?

4a. Look at the words below.

equal

unequal

Use each word to write two sentences.



A

5a. True or false?



The word 'unloved' cannot be used to describe something good.

Convince me.



R

6a. The sentence below can be completed with both of these words and the prefix 'un'.

wound

tied

Helen _____ the ball of string with great care.

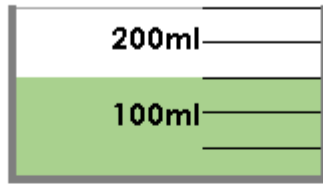
Do you agree?
 Explain your answer.



R

Measure Capacity 1

5a. Complete the sentence.



The capacity is millilitres.



VF

6a. True or false? There are 7L of liquid in the jug.



VF

7a. Draw an arrow to show the water level for a volume of 400ml.



VF

8a. Match the volumes to the correct containers.

A

B

C



1L

100ml

250ml



VF

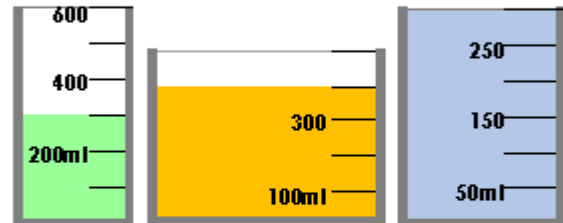
Measure Capacity 1

4a. Which is the odd one out? Explain your answer.

A

B

C



R

5a. Lewis has poured water into the measuring jug below. The volume is more than 100ml but less than 500ml.



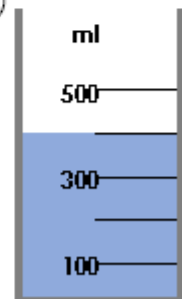
How much water could he have? Use arrows to label 3 possible answers.



PS

6a. Is Lu correct? Explain your answer.

I have 350ml of liquid in my container.



R

Adding Suffixes

In each box, circle one suffix that can be added to the root word to make a new word.

1. garden

ly er ous en

2. inform

ous ly en ation

3. discuss

er ous ian ion

4. usual

ed ing ly ous

5. appear

ation en ing ly

6. magic

en er ous ian

7. music

ian en ion ing

8. poison

ian ation ly ous

9. invent

en ion ous ly

10. danger

ous en ion ian

11. limit

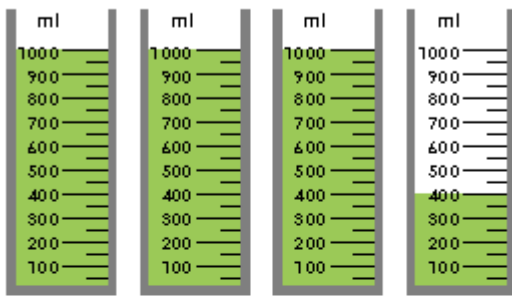
ion ly ous ed

12. complete

ous ation ly er

Measure Capacity 2

5a. Circle the capacity of the teapot.



3L and 350ml


4L and 400ml

3L and 400ml

VF

6a. Colour the containers to show the given volume.

3L and 650ml

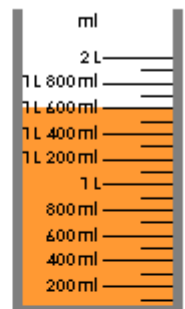


VF

7a. True or false?

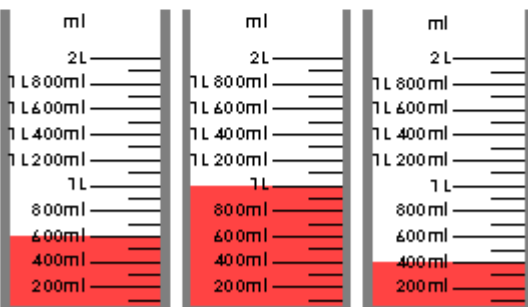


I have 1L and 500ml of orange juice for my family's breakfast.



VF

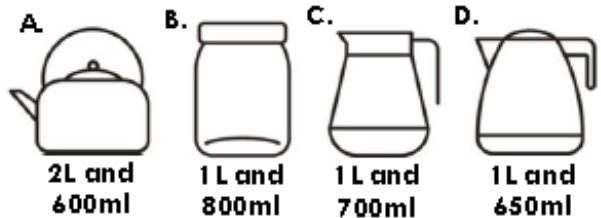
8a. How much liquid is there in total?



VF

Measure Capacity 2

4a. Josh fills the measuring cylinder with liquid. The volume is more than 1L 600ml but less than 1L 750ml. Which of these containers could he fill exactly?

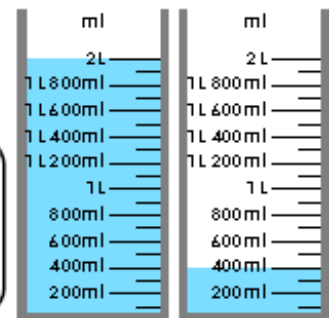


PS

5a. Nathan is measuring water. He says,



I know there is 1L 400ml because a full container is 1L and the other has 400ml.



Explain his mistake.

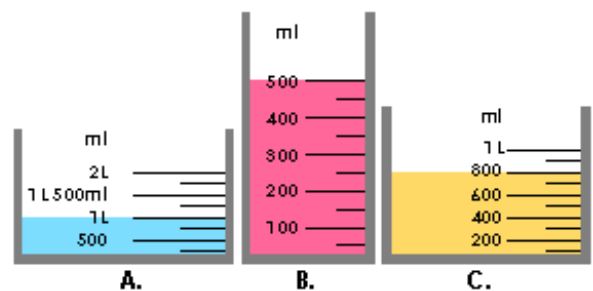


R

6a. Emilie says,



Container B has the most water in it because the water is further up.



Do you agree? Explain your answer.



R

What is a Preposition?

5a. Underline the noun in the sentence below.

They are standing quietly behind the door.



VF

6a. Circle the preposition in the sentence below.

The children are running across the playground.



VF

7a. Sort the nouns and prepositions into the table below.

lion through into
house beyond spoon

Nouns	Prepositions



VF

8a. Use a preposition from the word bank to complete the sentence.

about as a result of above

The birds flew _____ the beautiful lake.



VF

What is a Preposition?

4a. Does the preposition make sense in the sentence below?

Jack and Alice played games among they finished their dinner.

Explain your reasoning.



R

5a. Use a different preposition to change the meaning of the sentence below.

Holly fell down the stairs and scratched her arms and legs.



A

6a. List 3 prepositions which could be used to complete the sentence below.

There is a nice park with a football pitch _____ the high school.



A

Compare Capacities

1. Use $<$, $>$ or $=$ to complete the statement below in as many different ways as possible.



A.



150ml 150ml 150ml

B.



300ml 300ml

C.



350ml 350ml 350ml

D.



1L 1L

E.




1L and
250ml

F.



80ml 80ml 80ml

G.



1L and
100ml 1L and
100ml

H.



650ml 650ml 650ml



DP

2. Y3 have been discussing capacity. Sort the statements under the headings below then create some statements of your own.

Always	Sometimes	Never
--------	-----------	-------



Cassie

A paddling pool holds more than a bath.



Ethan

A can of pop holds less than a litre bottle of milk.

A mug holds more than glass.



Nellie

A lake holds more than a swimming pool.



Ted



Maya

A carton of juice holds less than a bottle of pop.



Noah

A yoghurt pot holds less than a water bottle.

DP

Using Different Types of Nouns

5a. Tick to show which types of nouns are used in the sentences below.

	Collective	Proper	Abstract	Common
A. My dad is from Italy.				
B. There is a swam of bees outside.				
C. Holly showed detemination today.				



VF

6a. Identify the different types of noun in the sentence below.

Ben visited a chain of islands off the coast of Greece during the holidays.

↑ A ↑ B
↑ C



VF

7a. True or false? The underlined noun is a collective noun.

My dad bought my mum a bouquet of flowers.



VF

8a. Underline all the common nouns in the sentence below.

We had pizza, chips and cake at the party.



VF

Using Different Types of Nouns

4a. Write a sentence using the noun below which also includes a:

- Collective noun
- Proper noun

puppy

Remember to punctuate your sentence correctly.



A

5a. Tick the noun type which is not included in the sentence below.

Lucy watched with impatience as the magician took out his cards for the trick.

proper collective
 common abstract

Rewrite the sentence to include the missing noun type.



A

6a. Ben and Hafsa are writing sentences.



The team of players ran out onto the pitch at the start of the match.



The players in Team GB ran out onto the pitch at the start of the match.

Who has used a collective noun correctly?

Explain how you know.



R

Add and Subtract Capacities

5a. Draw lines between these boxes to make the calculations correct.

Start	+ or -	Equals
3L and 400ml	+ 2L and 700ml	6L and 400ml
8L and 900ml	- 2L and 250ml	6L and 100ml
4L and 400ml	- 2L and 500ml	2L and 150ml



VF

6a. Complete the part whole model.



VF

7a. Find the difference between the containers:

A and C
B and C

Container	Capacity
A	4L and 500ml
B	5L and 700ml
C	2L and 950ml



VF

8a. Which three of these containers would you need to have a total of $9\frac{1}{2}$ L?



$2\frac{1}{2}$ L	$3\frac{1}{2}$ L	$\frac{3}{4}$ L	$6\frac{1}{4}$ L
------------------	------------------	-----------------	------------------



VF

Add and Subtract Capacities

4a. Wendy the witch is sorting through her cauldrons.

Cauldron A holds 2L and 150ml more than Cauldron C. Cauldron B's capacity is half of Cauldron C's capacity.



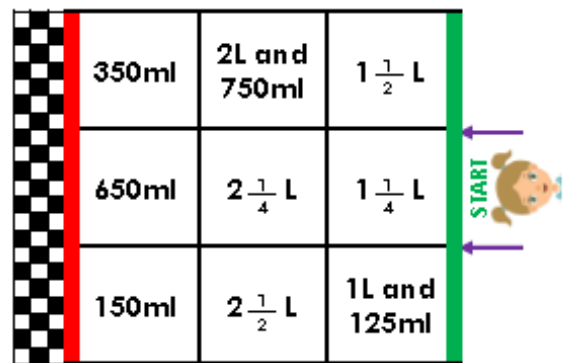
Cauldron B's capacity = 800ml



What are the capacities of Cauldron A and C?

PS

5a. Find a way through the maze.



She drinks 4L and 600ml in total.

PS

6a. Lu says, 'The jug has a capacity large enough to make 2 lots of slime.'

Slime Recipe

1L and 100ml glue
1L and 600ml washing liquid



4L and 900ml

Is he correct? Prove it.

What is the difference between the capacity of the jug and the volume of liquid?



R

Introducing Present Perfect Form

5a. Underline the verb in the sentence below.

The girl eventually arrived at the train station.



VF

6a. Add the correct auxiliary verb to the sentence below, making it the present perfect form.

They _____ considered all their options before buying the house.



did

has

have

VF

7a. Circle all the verbs in the grid below.

build	has	fruit
does	decide	busy
island	learn	early



VF

8a. Tick the sentences which are written in the present perfect tense.

A. They have lived here happily for over twenty years.

B. The King had reigned for sixteen years, until he died.

C. The children described the experiment in their science books.



VF

Introducing Present Perfect Form

4a. Janine thinks she has written a sentence in the present perfect tense.

People always arrived early for the popular exercise class on Saturdays.

Is she correct? Explain why.



R

5a. Add the auxiliary verb has or have to the following phrases to change them into the present perfect form.

He decides

They hear

We answer

You continue

I increase



A

6a. Have the verbs below been sorted into the correct columns?

Simple Past	Present Perfect
remembered	has promised
has appeared	have danced
arrived	has played
completed	tried

Convince me.



R

Friday

Draw a picture of you completing your practical maths!

