
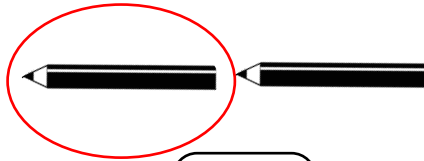





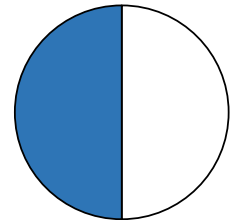
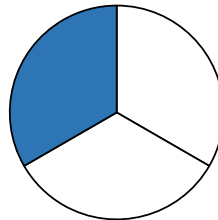
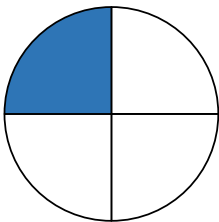
Complete the table.

Fraction	bar	words
$\frac{1}{2}$		
$\frac{1}{3}$		
$\frac{1}{4}$		

What fraction of each object is circled?



What fraction of each shape is shaded?



What type of fractions are the above called? Circle one.

Unit fractions


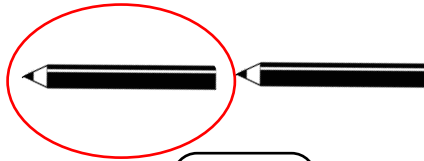

Non - unit fractions



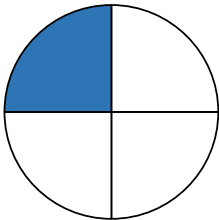
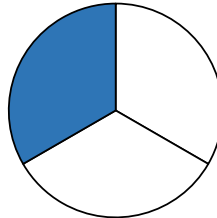
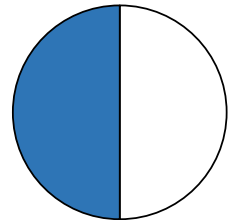
Complete the table.

Fraction	bar	words
$\frac{1}{2}$		one half
$\frac{1}{3}$		one third
$\frac{1}{4}$		one quarter

What fraction of each object is circled?

 $\frac{1}{3}$  $\frac{1}{2}$  $\frac{1}{4}$

What fraction of each shape is shaded?

 $\frac{1}{4}$  $\frac{1}{3}$  $\frac{1}{2}$

What type of fractions are the above called? Circle one.

Unit fractions


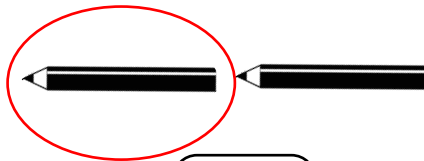

Non - unit fractions



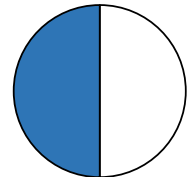
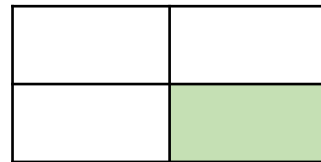
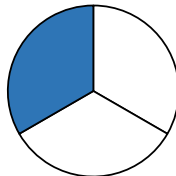

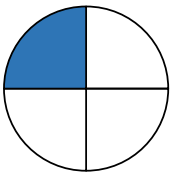
Complete the table.

Fraction	bar	words
$\frac{1}{2}$	<input type="text"/>	
$\frac{1}{3}$	<input type="text"/>	
$\frac{1}{4}$	<input type="text"/>	

What fraction of each object is circled?



What fraction of each shape is shaded?




What type of fractions are the above called?



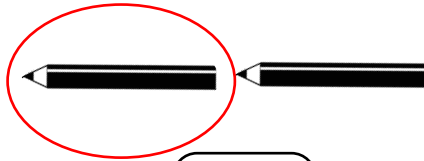
Complete the table.

Fraction	bar	words
$\frac{1}{2}$		one half
$\frac{1}{3}$		one third
$\frac{1}{4}$		one quarter


What fraction of each object is circled?



$\frac{1}{3}$

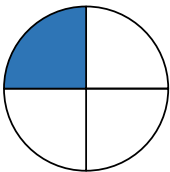


$\frac{1}{2}$




$\frac{1}{4}$

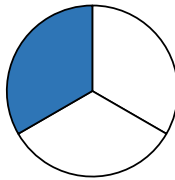
What fraction of each shape is shaded?



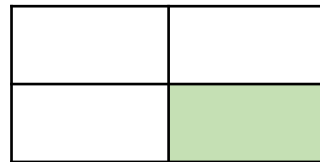
$\frac{1}{4}$



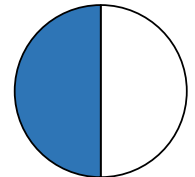
$\frac{1}{2}$



$\frac{1}{3}$



$\frac{1}{4}$



$\frac{1}{2}$

What type of fractions are the above called?


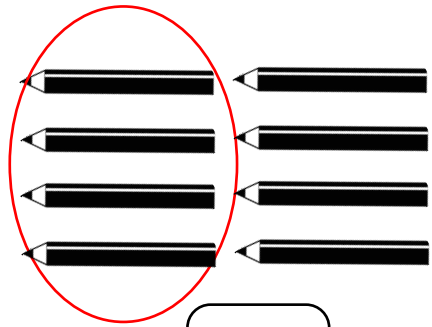
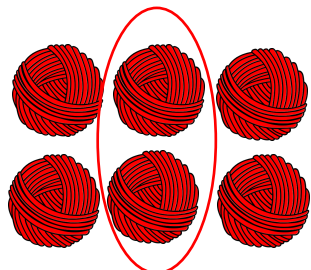
Unit fractions



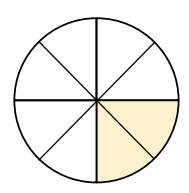
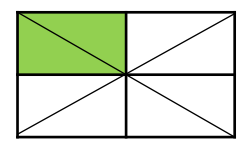
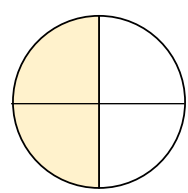
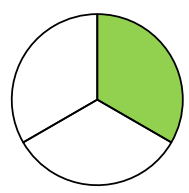
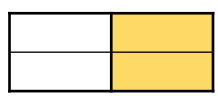
Complete the table.

Fraction	bar	words
	<input type="text"/>	
		one third
$\frac{1}{4}$	<input type="text"/>	

What fraction of each object is circled?



What fraction of each shape is shaded?
One half, one quarter or one third?



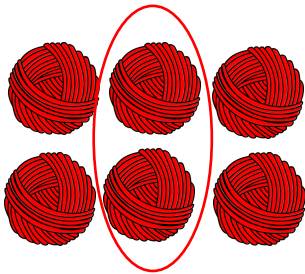
What type of fractions are the above called?



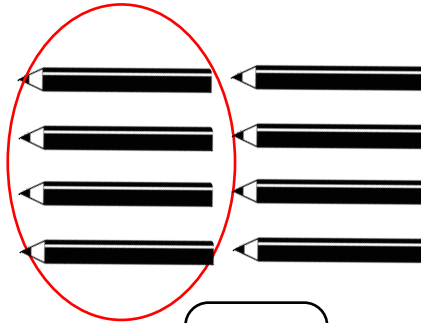
Complete the table.

Fraction	bar	words
$\frac{1}{2}$		one half
$\frac{1}{3}$		one third
$\frac{1}{4}$		one quarter


What fraction of each object is circled?



$\frac{1}{3}$




$\frac{1}{2}$

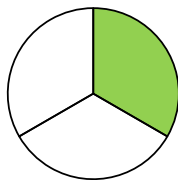


$\frac{1}{4}$

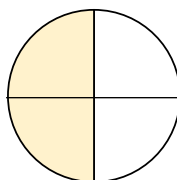
What fraction of each shape is shaded?
One half, one quarter or one third?



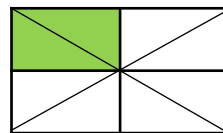
$\frac{1}{2}$



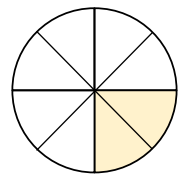
$\frac{1}{3}$



$\frac{1}{2}$



$\frac{1}{4}$



$\frac{1}{4}$

What type of fractions are the above called?

Unit fractions