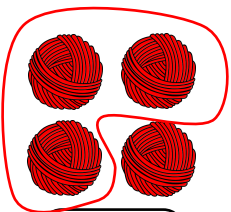



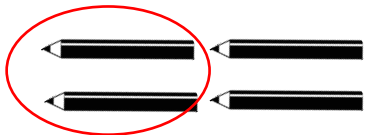


Complete the table.

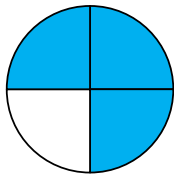
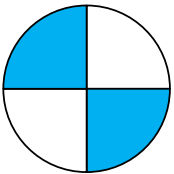
fraction	bar	words
$\frac{1}{4}$		
$\frac{2}{4}$		
$\frac{3}{4}$		
$\frac{4}{4}$		one whole



What fraction of each objects is circled?



What fraction of each shape is shaded?



What type of fractions are the above called? Circle one.

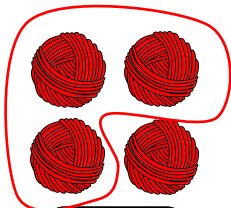
Unit fractions

Non - unit fractions



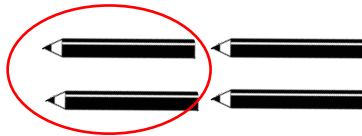
Complete the table.

fraction	bar	words
$\frac{1}{4}$		one quarter
$\frac{2}{4}$		two quarters
$\frac{3}{4}$		three quarters
$\frac{4}{4}$		one whole




$\frac{3}{4}$

What fraction of each objects is circled?

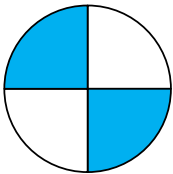


$\frac{2}{4}$



$\frac{3}{4}$

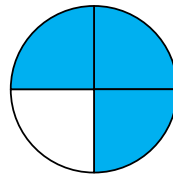
What fraction of each shape is shaded?



$\frac{2}{4}$



$\frac{3}{4}$



$\frac{3}{4}$



$\frac{2}{4}$

What type of fractions are the above called? Circle one.

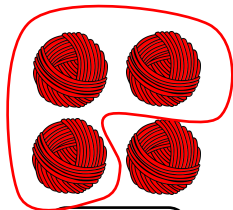
Unit fractions

Non - unit fractions


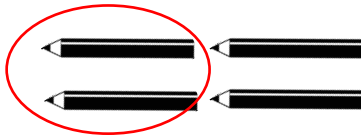


Complete the table.

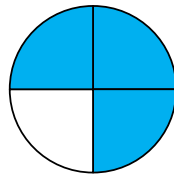
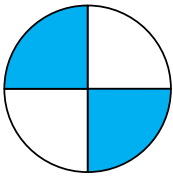
fraction	bar	words
$\frac{1}{4}$	<input type="text"/>	
$\frac{2}{4}$	<input type="text"/>	
$\frac{3}{4}$	<input type="text"/>	
$\frac{4}{4}$	<input type="text"/>	one whole



What fraction of each objects is circled?



What fraction of each shape is shaded?

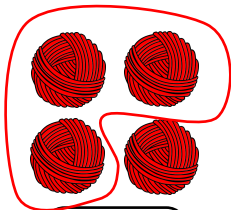


What type of fractions are the above called?



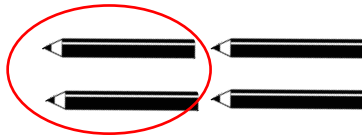
Complete the table.

fraction	bar	words
$\frac{1}{4}$		one quarter
$\frac{2}{4}$		two quarters
$\frac{3}{4}$		three quarters
$\frac{4}{4}$		one whole




$\frac{3}{4}$

What fraction of each objects is circled?

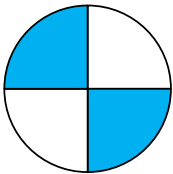


$\frac{2}{4}$



$\frac{3}{4}$

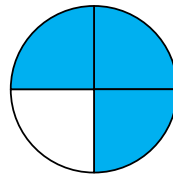
What fraction of each shape is shaded?



$\frac{2}{4}$



$\frac{3}{4}$



$\frac{3}{4}$



$\frac{2}{4}$




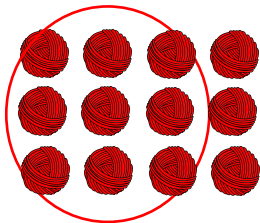
What type of fractions are the above called?

Non - unit fractions

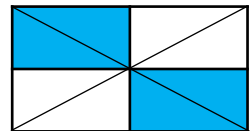
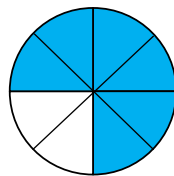
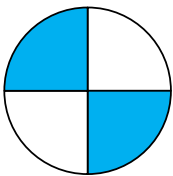


fraction	bar	words
$\frac{1}{4}$		
		two quarters
$\frac{3}{4}$		
		one whole

What fraction of each objects is circled?
Two quarters, three quarters, or four quarters?



What fraction of each shape is shaded?

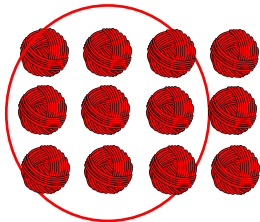


What type of fractions are the above called?




fraction	bar	words
$\frac{1}{4}$		one quarter
$\frac{2}{4}$		two quarters
$\frac{3}{4}$		three quarters
$\frac{4}{4}$		one whole


What fraction of each objects is circled?
Two quarters, three quarters, or four quarters?




$\frac{3}{4}$



$\frac{3}{4}$

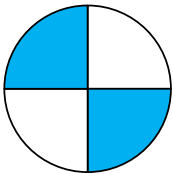


$\frac{4}{4}$



$\frac{2}{4}$

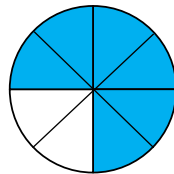
What fraction of each shape is shaded?



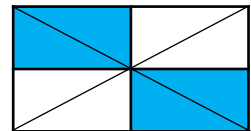
$\frac{2}{4}$



$\frac{3}{4}$



$\frac{3}{4}$



$\frac{2}{4}$

What type of fractions are the above called?

Non - unit fractions