

West Cornforth Primary School

Home Learning Pack



Week 4

WB: 11.4.20

Monday English-

Complete the Year 1 SPaG tasks.

Year 1 Summer Term 1 SPaG Mat

2

a Tick **one** word that can have '-ed' added at the end to make a new word.

bell

song

push

c Unscramble this sentence.

sat rocks. She the on

e Find the hidden words.

one w a b d g

like l h a n a

some e i e e s


come n e k n o

when o n e e m

 p c o m e

b Complete the table.

Singular (one)	Plural (more than one)
bag	
boot	




d Tick the real words and cross the alien words.

fork pork

sorf short

hurt turb




f Help poor Mr Whoops by circling the correct spelling.

wiv

with


wive



Year 1 Summer Term 1 SPaG Mat

3

a Which year 1 common exception word has Mr Whoops been juggling with?



c Tick the correct sentence.

Can I sit next to you?

can I sit next to you!

e Circle the words you think should have a capital letter.

car beth smart

b Practise writing these spellings.


then _____

them _____

with _____

d Write these two sentences again, but as one sentence, joining them with 'and'.

Pam had a dog. She was not sad.



f Tick **one** word that can have '-ing' added to the end to make a new word.

park

has

from

Find a half (2)


- 1 a) Circle half of the pencils.



- b) Complete the sentence.

Half of 6 is

- 2 Colour half of each group.



Did you do it the same way as your partner?



3 How many counters are there in each group?


Find half of each group.

a)



Half of is

b)



Half of is

c)



is half of

4 Complete the sentence.

7 is half of



Monday Geography-

Find out about Durham Cathedral. Can you write 10 facts that you have found out?



1.	_____





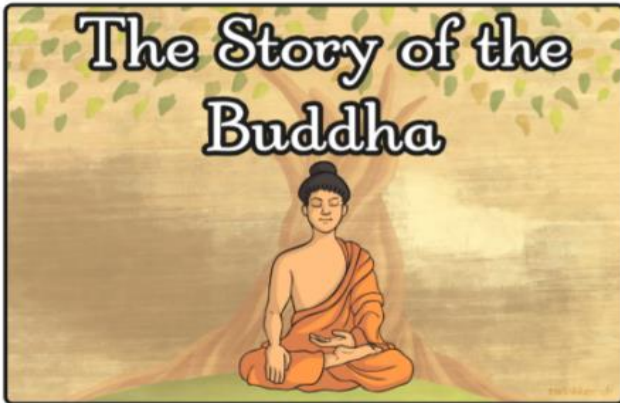
2.	_____

3.	_____

4.	_____

5.	_____

Monday RE- Recap the story of Buddha. Look back at the cards you sorted last week.



Use the blank story board and your knowledge of the story, to complete a simple story board of your own



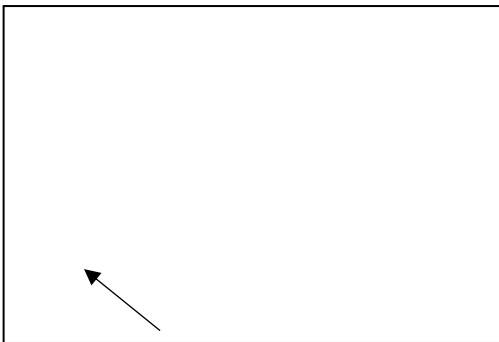



The image displays a 3x2 grid of blank storyboards. Each storyboard is a large rectangle with a small circle at the bottom-left corner. To the right of each rectangle are three vertical lines, intended for writing. The grid is arranged as follows:

- Row 1: Two identical blank storyboards.
- Row 2: Two identical blank storyboards.
- Row 3: Two identical blank storyboards.

Tuesday English-

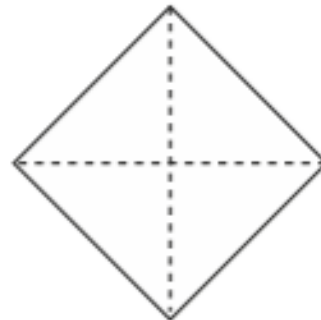
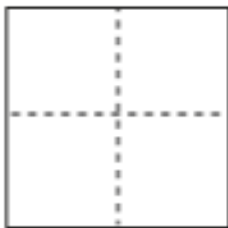
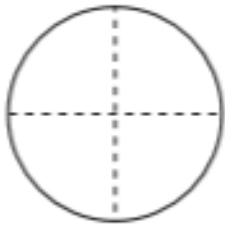
What do you already know about the early life of Grace Darling?

Complete a spider diagram to highlight what you already know.



Find a quarter (1)

1 Colour a quarter of each shape.



2 Show a quarter in four different ways.



- 3 Kim wants to show a quarter.




None of these show quarters.



Do you agree with Kim? _____

Talk about your answer.

- 4 Tick the shapes that show one quarter.



Find a quarter (2)

1 Circle a quarter of each group.

a)



A quarter of 4 is

b)



A quarter of 12 is

c)



A quarter of 20 is





2 Complete the sentences.

a) Half of 12 is

A quarter of 12 is

b) Half of 16 is

A quarter of 16 is

c) Half of 8 is

A quarter of 8 is

What do you notice?



3 A quarter is 6



What is the whole?

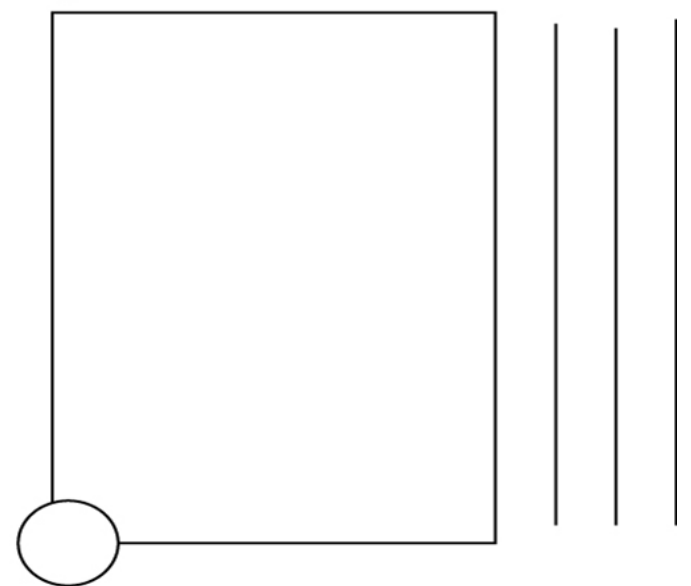
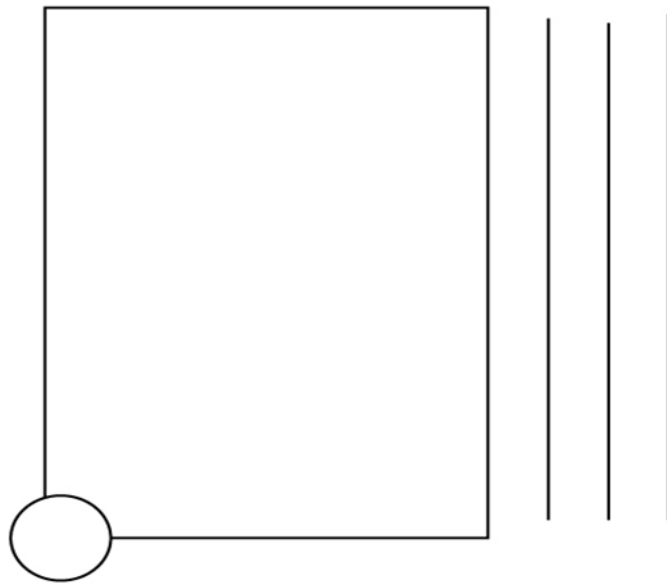
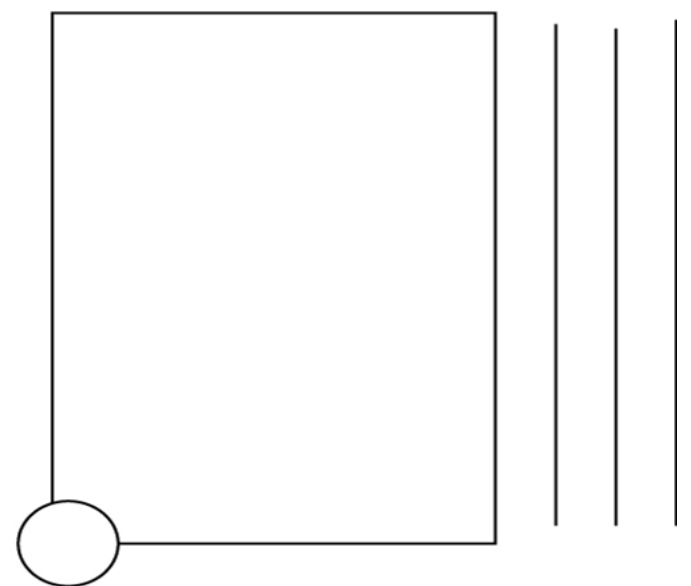
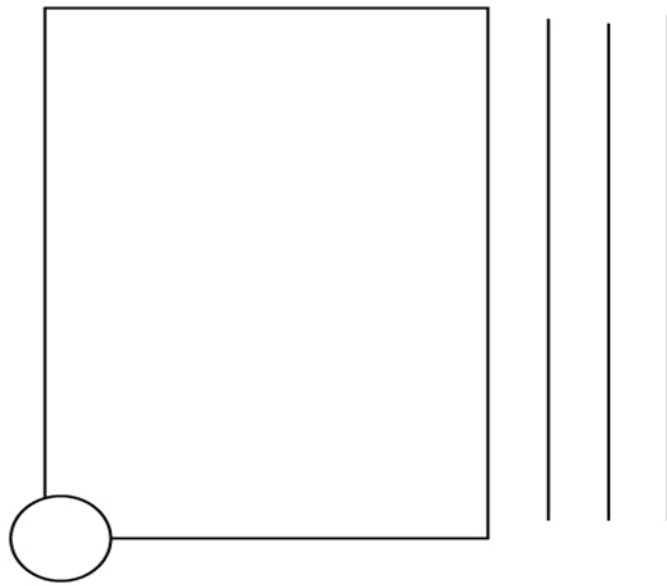
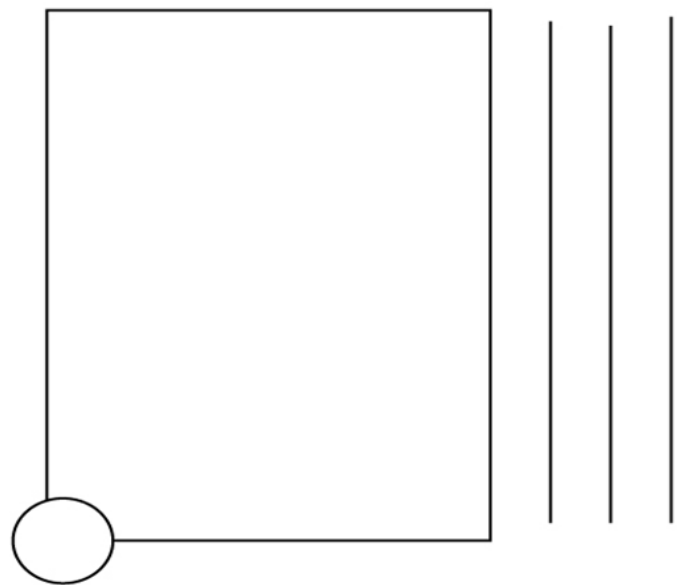
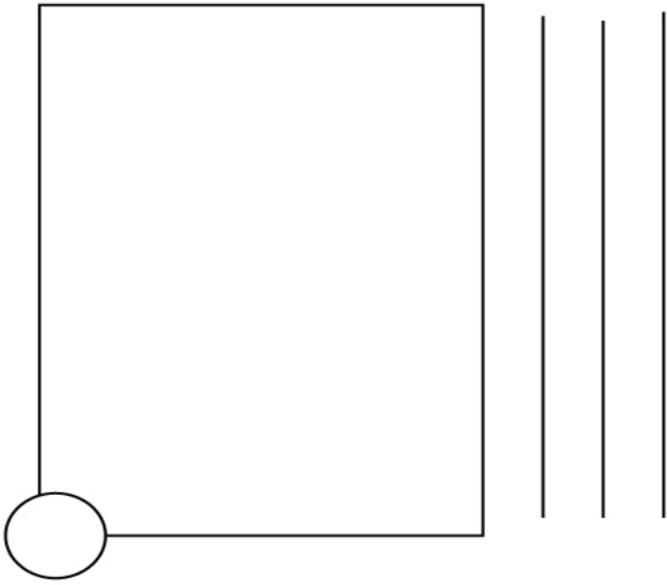
The whole is



Thursday English - Cut out and order the images that show the events of the 7th September 1838.

Stick the images onto the template provided. Add numbers to clearly show the order of key events. Write about each image.

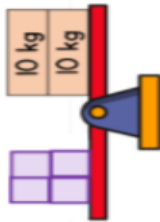




Problem Solving

Your turn

1 The scales are balanced.

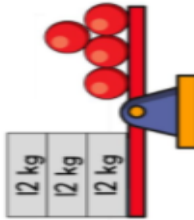


Each block has the same mass.

What is the mass of one of the blocks?

2

The scales are balanced.



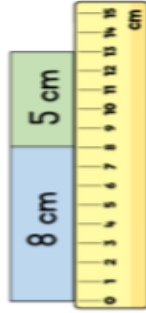
Each ● sphere has the same mass.

What is the mass of one of the spheres?

Problem Solving

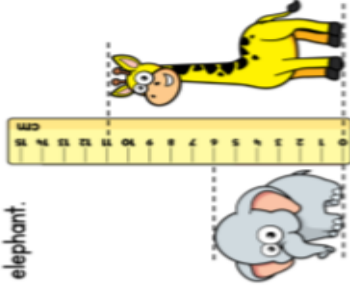
Your turn

Two strips of paper are placed end to end.



How much longer is the blue strip than the green strip?

Here is a toy giraffe and a toy elephant.



How much shorter is the elephant than the giraffe?

Friday English- Write a recount all about the events that took place on the night of 7th September 1838.

First, _____

Then, _____

Next, _____

Finally, _____

Friday Maths – Family challenges, complete together.

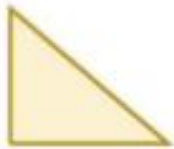
Challenge 1

This is half of Lee's strawberries.



How many strawberries does Lee have?

This is half of Lee's shape.



What could the whole shape look like?

Challenge 2


Tim buys a lolly and a chew.



The lolly costs 12p more than the chew.

The total cost of the two items is 82p.

How much does the lolly cost?



History- What made Grace Darling famous?

Using the template provided complete the thought bubbles to show what you think Grace Darling and her father were thinking during the rescue.



Art/DT

Plan and then create your own lighthouse using junk.

Discuss the steps with an adult.



