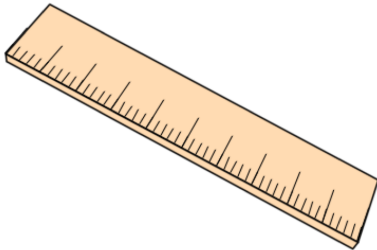


Primary Practice Questions



Corbettmaths



Multiples



Tips

- Read each question carefully
- Attempt every question.
- Check your answers seem right.
- Always show your workings

Recap



Remember

- There are daily questions found at
www.corbettmathsprimary.com/5-a-day/

1. Write down the first **five** multiples of 3

--	--	--	--	--

2. Write down the first **five** multiples of 8

--	--	--	--	--

3. Write down the first **five** multiples of 13

--	--	--	--	--

4. Write down two multiples of 4

--	--

Write down two multiples of 9

--	--

Write down a number that is a multiple of **both** 4 and 9

--

5. Here is a diagram for sorting number.

Write **one number** in each box

One is done for you.

	multiple of 7	not a multiple of 7
multiple of 2	14	
not a multiple of 2		

6. Here is a list of numbers.

15 16 17 18 19 20 21 22

From the list, write down a multiple of 6

From the list, write down a multiple of 7

7. In the circles, write a multiple that belongs to each set

One has been done for you.

numbers from 1 to 49	multiple of 10	30
numbers from 50 to 99	multiple of 20	
numbers from 100 to 149	multiple of 30	
numbers from 150 to 199	multiple of 40	

8. Write **one** number which fits **all three** of these statements

It is odd

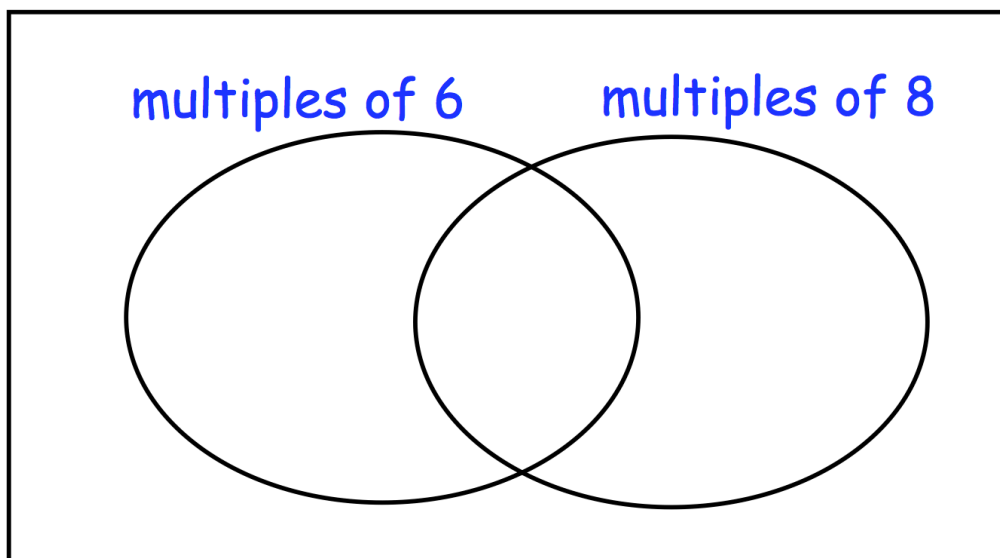
It is a multiple of 9

It is between 30 and 50

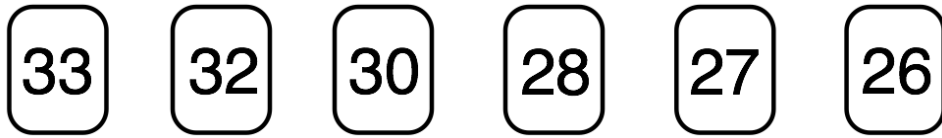
9. Here is a diagram for sorting numbers.

Write **each** number in its correct place on the diagram.

40 48 56 60



10. Here are six number cards.



Use each card **once** to make every statement below correct.

is a multiple of 2

is a multiple of 5

is a multiple of 9

is a multiple of 4

is a multiple of 11

is a multiple of 7

11.

Write **all** the common multiples of 4 and 6 **less than 50**

12. Here is a sorting diagram

	multiple of 10	not a multiple of 10
multiple of 5	A	B
not a multiple of 5	C	D

Write a number that could got in section B

Section C can never have any numbers in it.

Explain why

.....

.....

13. Find the multiple of 18 that is closest to 100

14. Olivia uses these digit cards



She makes a 1-digit number and a 2-digit number.

She multiplies them together.

Her answer is a **multiple of 4**

What could Olivia's multiplication be?

$$\square \times \square\square$$

15. 171 is a multiple of 3.
220 is a multiple of 11.

Find a number between 171 and 220 that is **both** a multiple of 3 and a multiple of 11.

16. A light flashes every 8 seconds.

How many times will it flash in 3 minutes?

17. m and n stand for two numbers

m is a multiple of 5

n is a multiple of 8

$$\frac{m}{n} = \frac{3}{4}$$

Find numbers that m and n stand for

$m =$

$n =$