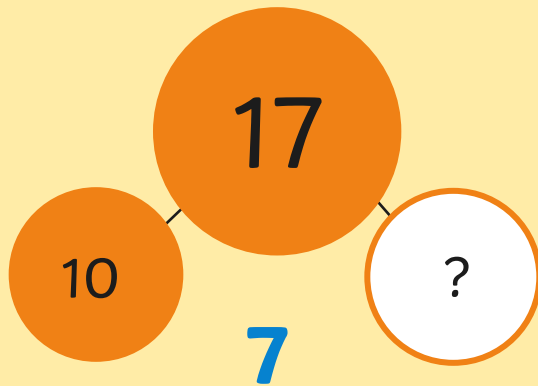



< Menu

Place Value



Answer

Problem Solving



How many circles are there?

Answer

+ and -

$$9 + 3 = \square$$

Answer

Reasoning

If I count in 2s
from 0, I will
say the number
6.

Is Henry correct?
Explain why.



< Menu


Place Value

0, 2, 4, 6, 8

What is the next number?

Answer

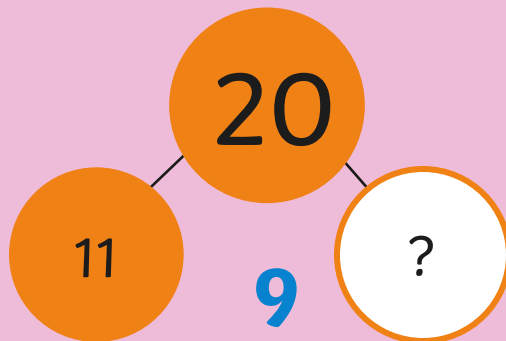
Problem Solving



How many squares are there?

Answer

+ and -




Answer

Reasoning

0, 2, 6, 8

What number has Alison missed out?



< Menu

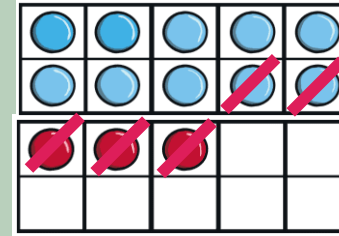
Place Value



Write the number that is
one more.

Answer **35**


Problem Solving



Write a subtraction sentence
about this picture.

Answer **13 - 5 = 8**

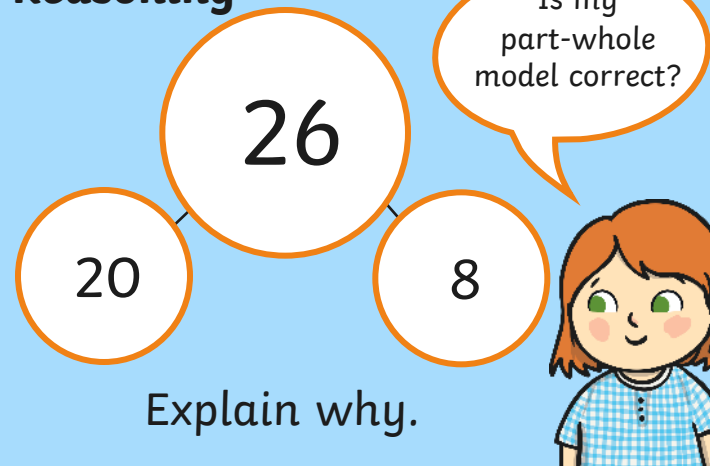
+ and -



$$20 - 3 = 17$$

Answer

Reasoning



Explain why.

< Menu


Place Value



Which number is the greatest?

Answer
24

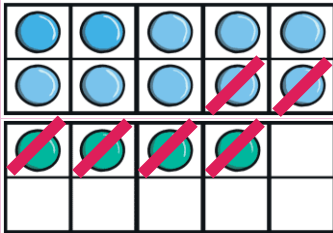
Problem Solving



What number is shown here?

Answer
28

+ and -



$$14 - 6 = 8$$

Answer

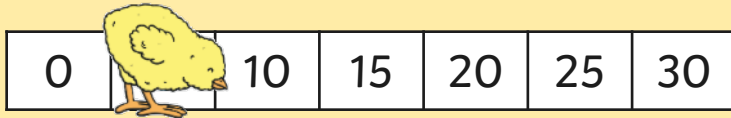
Reasoning

Which line is the longest?
Explain how you know.



< Menu

Place Value



What number is behind the chick?

Answer

Problem Solving



What are the missing numbers on the number line?

Answer

+ and -

$$9 + 4 = 13$$

A diagram showing the number 4 split into two parts: 1 and 3. Lines connect the 4 to the 1 and the 3. The 1 and 3 are inside orange circles.

Answer

Reasoning

If I count in 5s from 0, I will say the number 18.

Is Henry correct?
Explain why.

